



Determine which graph goes with which table.

1)

| Color | People |
|--------|--------|
| blue | 1,000 |
| green | 6,000 |
| orange | 3,000 |
| yellow | 9,000 |
| red | 10,000 |

2)

| Color | People |
|--------|--------|
| blue | 10,000 |
| green | 3,000 |
| orange | 1,000 |
| yellow | 6,000 |
| red | 9,000 |

3)

| Color | People |
|--------|--------|
| blue | 10,000 |
| green | 1,000 |
| orange | 6,000 |
| yellow | 9,000 |
| red | 3,000 |

4)

| Color | People |
|--------|--------|
| blue | 10,000 |
| green | 6,000 |
| orange | 3,000 |
| yellow | 1,000 |
| red | 9,000 |

5)

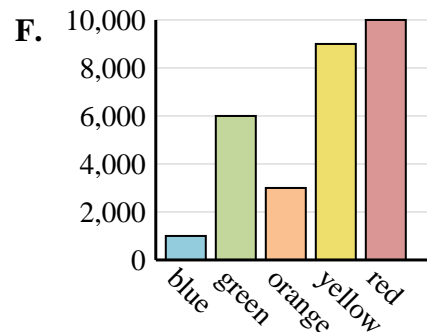
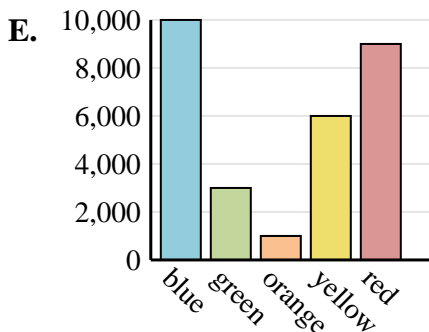
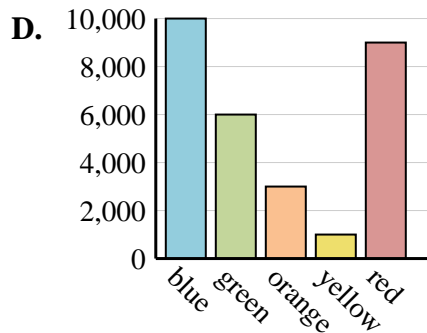
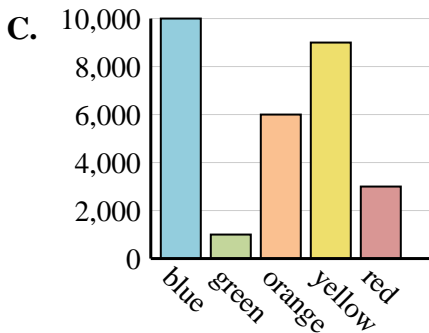
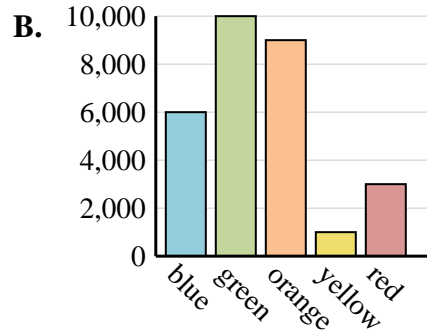
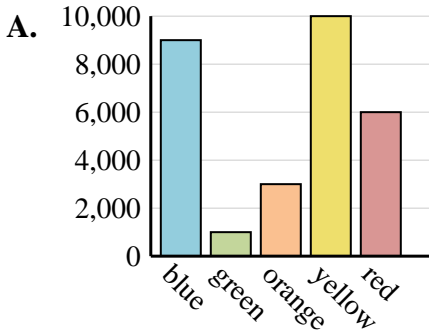
| Color | People |
|--------|--------|
| blue | 10,000 |
| green | 6,000 |
| orange | 1,000 |
| yellow | 3,000 |
| red | 9,000 |

6)

| Color | People |
|--------|--------|
| blue | 10,000 |
| green | 3,000 |
| orange | 9,000 |
| yellow | 1,000 |
| red | 6,000 |

Answers

1. _____
2. _____
3. _____
4. _____
5. _____
6. _____





Determine which graph goes with which table.

1)

| Color | People |
|--------|--------|
| blue | 1,000 |
| green | 6,000 |
| orange | 3,000 |
| yellow | 9,000 |
| red | 10,000 |

2)

| Color | People |
|--------|--------|
| blue | 10,000 |
| green | 3,000 |
| orange | 1,000 |
| yellow | 6,000 |
| red | 9,000 |

3)

| Color | People |
|--------|--------|
| blue | 10,000 |
| green | 1,000 |
| orange | 6,000 |
| yellow | 9,000 |
| red | 3,000 |

4)

| Color | People |
|--------|--------|
| blue | 10,000 |
| green | 6,000 |
| orange | 3,000 |
| yellow | 1,000 |
| red | 9,000 |

5)

| Color | People |
|--------|--------|
| blue | 10,000 |
| green | 6,000 |
| orange | 1,000 |
| yellow | 3,000 |
| red | 9,000 |

6)

| Color | People |
|--------|--------|
| blue | 10,000 |
| green | 3,000 |
| orange | 9,000 |
| yellow | 1,000 |
| red | 6,000 |

Answers

1. **F**
2. **E**
3. **C**
4. **D**
5. **G**
6. **H**

